

Section 9: Applied Optimization

We have used derivatives to help find the maximums and minimums of some functions given by equations, but it is very unlikely that someone will simply hand you a function and ask you to find its extreme values. More typically, someone will describe a problem and ask your help in maximizing or minimizing something: "What is the largest volume package which the post office will take?"; "What is the quickest way to get from here to there?"; or "What is the least expensive way to accomplish some task?" In this section, we'll discuss how to find these extreme values using calculus.

Max/Min Applications

Example: The manager of a garden store wants to build a 600 square foot rectangular enclosure on the store's parking lot in order to display some equipment. Three sides of the enclosure will be built of redwood fencing, at a cost of \$7 per running foot. The fourth side will be built of cement blocks, at a cost of \$14 per running foot. Find the dimensions of the least costly such enclosure.

The process of finding maxima or minima is called optimization. The function we're optimizing is called the *objective function*. The objective function can be recognized by its proximity to "est" words (greatest, least, highest, farthest, most, ...) Look at the garden store example; the cost function is the objective function.

In many cases, there are two (or more) variables in the problem. In the garden store example again, the length and width of the enclosure are both unknown. If there is an equation that relates the variables we can solve for one of them in terms of the others, and write the objective function as a function of just one variable. Equations that relate the variables in this way are called *constraint equations*. The constraint equations are always equations, so they will have equals signs. For the garden store, the fixed area relates the length and width of the enclosure. This will give us our constraint equation.

Max-Min Story Problem Technique:


- (a) Translate the English statement of the problem line by line into a picture (if that applies) and into math. This is often the hardest step!
- (b) Identify the objective function. Look for words indicating a largest or smallest value.
 - (b1) If you seem to have two or more variables, find the constraint equation. Think about the English meaning of the word "constraint," and remember that the constraint equation will have an equals sign.
 - (b2) Solve the constraint equation for one variable and substitute into the objective function. Now you have an equation of one variable.
- (c) Use calculus to find the optimum values. (Take derivative, find critical points, test. Don't forget to check the endpoints!)
- (d) Look back at the question to make sure you answered what was asked. Translate your number answer back into English.

Example 1

The manager of a garden store wants to build a 600 square foot rectangular enclosure on the store's parking lot in order to display some equipment. Three sides of the enclosure will be built of redwood fencing, at a cost of \$7 per running foot. The fourth side will be built of cement blocks, at a cost of \$14 per running foot. Find the dimensions of the least costly such enclosure.

First, translate line by line into math and a picture:

<i>Text</i>	<i>Translation</i>
The manager of a garden store wants to build a <i>600 square foot rectangular</i> enclosure on the store's parking lot in order to display some equipment.	Let x and y be the dimensions of the enclosure, with y being the length of the side made of blocks. Then: $Area = A = xy = 600$
<i>Three sides of the enclosure</i> will be built of redwood fencing, at a <i>cost of \$7 per running foot</i> . <i>The fourth side</i> will be built of cement blocks, at a <i>cost of \$14 per running foot</i> .	$2x + y$ costs \$7 per foot y costs \$14 per foot So $Cost = C = 7(2x + y) + 14y = 14x + 21y$
Find the dimensions of the least costly such enclosure.	Find x and y so that C is minimized.



The objective function is the cost function, and we want to minimize it. As it stands, though, it has two variables, so we need to use the constraint equation. The constraint equation is the fixed area $A = xy = 600$. Solve A for x to get $x = \frac{600}{y}$, and then substitute into C :

$$C = 14\left(\frac{600}{y}\right) + 21y = \frac{8400}{y} + 21y.$$

Now we have a function of just one variable, so we can find the minimum using calculus.

$$C' = -\frac{8400}{y^2} + 21$$

C' is undefined for $y = 0$, and $C' = 0$ when $y = 20$ or $y = -20$.

Of these three critical numbers, only $y = 20$ makes sense (is in the domain of the actual function) – remember that y is a length, so it can't be negative, and $y = 0$ would mean there was no enclosure at all, so it couldn't have an area of 600 square feet.

Test $y = 20$: (I chose the second derivative test)

$$C'' = \frac{16800}{y^3} > 0, \text{ so this is a local minimum.}$$

Since this is the only critical point in the domain, this must be the global minimum. Going back to our constraint function, we can find that when $y = 20$, $x = 30$. The dimensions of the enclosure that minimize the cost are 20 feet by 30 feet.

When trying to maximize their revenue, businesses also face the constraint of consumer demand. While a business would love to see lots of products at a very high price, typically demand decreases as the price of goods increases. In simple cases, we can construct that demand curve to allow us to maximize revenue.

Example 2

A concert promoter has found that if she sells tickets for \$50 each, she can sell 1200 tickets, but for each \$5 she raises the price, 50 less people attend. What price should she sell the tickets at to maximize her revenue?

We are trying to maximize revenue, and we know that $R = pq$, where p is the price per ticket, and q is the quantity of tickets sold.

The problem provides information about the demand relationship between price and quantity - as price increases, demand decreases. We need to find a formula for this relationship. To investigate, let's calculate what will happen to attendance if we raise the price:

Price, p	50	55	60	65
Quantity, q	1200	1150	1100	1050

You might recognize this as a linear relationship. We can find the slope for the relationship by using two points: $m = \frac{1150 - 1200}{55 - 50} = \frac{-50}{5} = -10$. You may notice that the second step in that calculation corresponds directly to the statement of the problem: the attendance drops 50 people for every \$5 the price increases.

Using the point-slope form of the line, we can write the equation relating price and quantity:
 $q - 1200 = -10(p - 50)$

Simplifying to slope-intercept form gives the demand equation $q = 1700 - 10p$

Substituting this into our revenue equation, we get an equation for revenue involving only one variable:

$$R = pq = p(1700 - 10p) = 1700p - 10p^2$$

Now, we can find the maximum of this function by finding critical numbers.

$$R' = 1700 - 20p, \text{ so } R' = 0 \text{ when } p = 85.$$

Using the second derivative test, $R'' = -20 < 0$, so the critical number is a local maximum. Since it's the only critical number, we can also conclude it's the global maximum.

The promoter will be able to maximize revenue by charging \$85 per ticket. At this price, she will sell $q = 1700 - 10(85) = 850$ tickets, generating \$72,250 in revenue.

“Marginal Revenue = Marginal Cost”

You may have heard before that “profit is maximized when marginal cost and marginal revenue are equal.” Now you can see why people say that! (Even though it’s not completely true.)

General Example 3

Suppose we want to maximize profit.

Now we know what to do – find the profit function, find its critical points, test them, etc.

But remember that Profit = Revenue – Cost. So Profit' = Revenue' – Cost'.

That is, the derivative of the profit function is MR – MC.

Now let’s find the critical points – those will be where Profit' = 0 or is undefined.

Profit' = 0 when MR – MC = 0, or where MR = MC.

That’s where the saying comes from! Here’s a more accurate way to express this:

Profit has critical points when Marginal Revenue and Marginal Cost are equal.

In all the cases we’ll see in this class, Profit will be very well behaved, and we won’t have to worry about looking for critical points where Profit' is undefined. But remember that not all critical points are local max! The places where MR = MC could represent local max, local min, or neither one.

Example 4

A company sells q ribbon winders per year at $\$p$ per ribbon winder. The demand function for ribbon winders is given by: $p = 300 - 0.02q$. The ribbon winders cost $\$30$ apiece to manufacture, plus there are fixed costs of $\$9000$ per year. Find the quantity where profit is maximized.

We want to maximize profit, but there isn't a formula for profit given. So let's make one. We can find a function for Revenue = pq using the demand function for p .

$$R(q) = (300 - 0.02q)q = 300q - 0.02q^2$$

We can also find a function for Cost, using the variable cost of $\$30$ per ribbon winder, plus the fixed cost:

$$C(q) = 9000 + 30q$$

Putting them together, we get a function for Profit:

$$P(q) = R(q) - C(q) = (300q - 0.02q^2) - (9000 + 30q) = -0.02q^2 + 270q - 9000.$$

Now we have two choices. We can find the critical points of Profit by taking the derivative of $P(q)$ directly, or we can find MR and MC and set them equal. (Naturally, you'll get the same answer either way.)

I'll use $MR = MC$ this time.

$$MR = 300 - 0.04q$$

$$MC = 30$$

$$300 - 0.04q = 30$$

$$270 = 0.04q$$

$$q = 6750$$

The only critical point is at $q = 6750$. Now we need to be sure this is a local max and not a local min. In this case, I'll look to the graph of $P(q)$ – it's a downward opening parabola, so this must be a local max. And since it's the only critical point, it must also be the global max.

Profit is maximized when they sell 6750 ribbon winders.

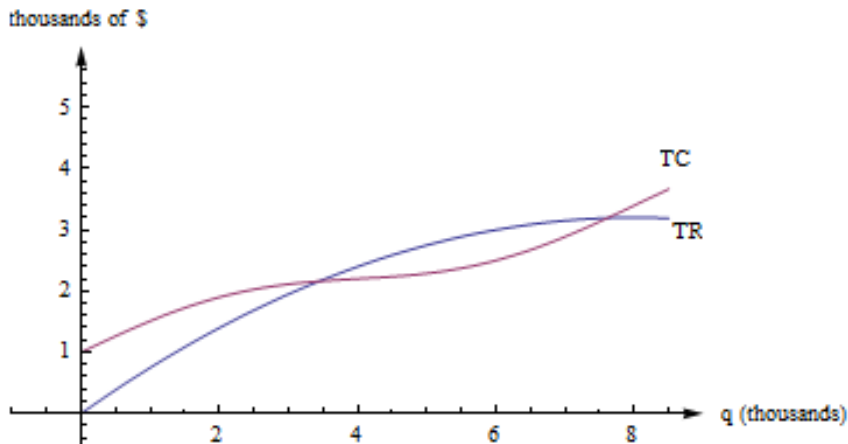
“Average Cost = Marginal Cost”

“Average cost is minimized when average cost = marginal cost” is another saying that isn't quite true; in this case, the correct statement is:

Average Cost has critical points when Average Cost and Marginal Cost are equal.

Let's look at a geometric argument here:

Remember that the average cost is the slope of the diagonal line, the line from the origin to the point on the total cost curve. If you move your clear plastic ruler around, you'll see (and feel) that the slope of the diagonal line is smallest when the diagonal line just touches the cost curve – when the diagonal line is actually a tangent line – when the average cost is equal to the marginal cost.



Example 5

The cost in dollars to produce q gift baskets is given by $C(q) = 160 + 2q + .1q^2$. Find the quantity where the average cost is minimum.

$A(q) = \frac{C(q)}{q} = \frac{160}{q} + 2 + .1q$. We could find the critical points by finding A' , or by setting average cost to marginal cost; I'll do the latter this time.

$MC(q) = 2 + .2q$. So I want to solve:

$$\frac{160}{q} + 2 + .1q = 2 + .2q$$

$$\frac{160}{q} = .1q$$

$$1600 = q^2$$

$$q = 40$$

The critical point of average cost is when $q = 40$.

Notice that we still have to confirm that the critical point is a minimum. For this, we can use the first or second derivative test on $A(q)$.

$$A'(q) = \frac{-160}{q^2} + .1$$

$$A''(q) = \frac{320}{q^3} > 0$$

The second derivative is positive for all positive q , so that means this is a local min. Average cost is minimized when they produce 40 gift baskets; at that quantity, the average cost is \$10 per basket.

2.9 Exercises

- You have 200 feet of fencing available to construct a rectangular pen with a fence divider down the middle (see below). What dimensions of the pen enclose the largest total area?
 - If you need 2 dividers, what dimensions of the pen enclose the largest area?
 - What are the dimensions in parts (a) and (b) if one edge of the pen borders on a river and does not require any fencing?

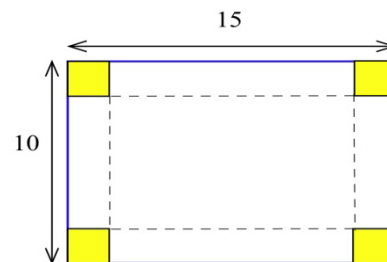


- You have 120 feet of fencing to construct a pen with 4 equal sized stalls. If the pen is rectangular and shaped like the one below, what are the dimensions of the pen of largest area and what is that area?

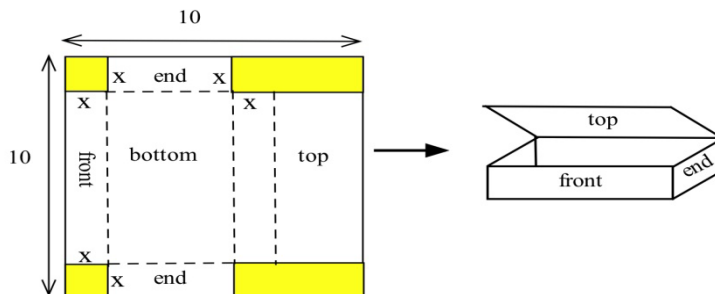


- Suppose you decide to fence the rectangular garden in the corner of your yard. Then two sides of the garden are bounded by the yard fence which is already there, so you only need to use the 80 feet of fencing to enclose the other two sides. What are the dimensions of the new garden of largest area? What are the dimensions of the rectangular garden of largest area in the corner of the yard if you have F feet of new fencing available?

- You have a 10 inch by 15 inch piece of tin which you plan to form into a box (without a top) by cutting a square from each corner and folding up the sides. How much should you cut from each corner so the resulting box has the greatest volume?
 - If the piece of tin is A inches by B inches, how much should you cut from each corner so the resulting box has the greatest volume?

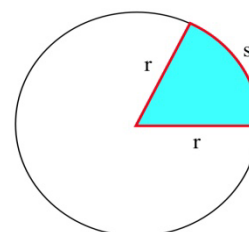


- You have a 10 inch by 10 inch piece of cardboard which you plan to cut and fold as shown to form a box with a top. Find the dimensions of the box which has the largest volume.

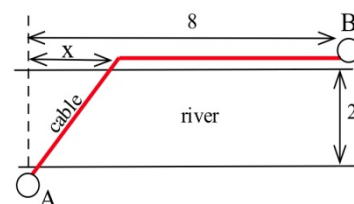


6. (a) You have been asked to bid on the construction of a square-bottomed box with no top which will hold 100 cubic inches of water. If the bottom and sides are made from the same material, what are the dimensions of the box which uses the least material? (Assume that no material is wasted.)
- (b) Suppose the box in part (a) uses different materials for the bottom and the sides. If the bottom material costs 5¢ per square inch and the side material costs 3¢ per square inch, what are the dimensions of the least expensive box which will hold 100 cubic inches of water?
7. (a) Determine the dimensions of the least expensive cylindrical can which will hold 100 cubic inches if the materials cost 2¢ , 5¢ and 3¢ respectively for the top, bottom and sides.
- (b) How do the dimensions of the least expensive can change if the bottom material costs more than 5¢ per square inch?

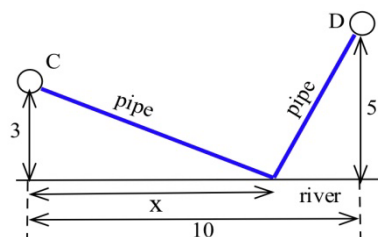
8. You have 100 feet of fencing to build a pen in the shape of a circular sector, the "pie slice" shown. The area of such a sector is $rs/2$. What value of r maximizes the enclosed area?



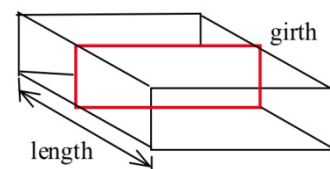
9. (a) You have been asked to determine the least expensive route for a telephone cable which connects Andersonville with Beantown. If it costs $\$5000$ per mile to lay the cable on land and $\$8000$ per mile to lay the cable across the river and the cost of the cable is negligible, find the least expensive route.
- (b) What is the least expensive route if the cable costs $\$7000$ per mile plus the cost to lay it.



10. You have been asked to determine where a water works should be built along a river between Chesterville and Denton to minimize the total cost of the pipe to the towns.
- (a) Assume that the same size (and cost) pipe is used to each town. (This part can be done quickly without using calculus.)
- (b) Assume that the pipe to Chesterville costs $\$3000$ per mile and to Denton it costs $\$7000$ per mile.



13. U.S. postal regulations state that the sum of the length and girth (distance around) of a package must be no more than 108 inches.
- (a) Find the dimensions of the acceptable box with a square end which has the largest volume.
- (b) Find the dimensions of the acceptable box which has the largest volume if its end is a rectangle twice as long as it is width.
- (c) Find the dimensions of the acceptable box with a circular end which has the largest volume.



14. D. Simonton claims that the "productivity levels" of people in different fields can be described as a function of their "career age" t by $p(t) = e^{-at} - e^{-bt}$ where a and b are constants which depend on the field of work, and career age is approximately 20 less than the actual age of the individual.
- (a) Based on this model, at what ages do mathematicians ($a=.03$, $b=.05$), geologists ($a=.02$, $b=.04$), and historians ($a=.02$, $b=.03$) reach their maximum productivity?
- (b) Simonton says "With a little calculus we can show that the curve ($p(t)$) maximizes at $t = \frac{1}{b-a} \ln\left(\frac{b}{a}\right)$." Use calculus to show that Simonton is correct.
- Note: Models of this type have uses for describing the behavior of groups, but it is dangerous and usually invalid to apply group descriptions or comparisons to **individuals** in the group. (Scientific Genius, by Dean Simonton, Cambridge University Press, 1988, pp. 69 – 73)
15. You own a small airplane which holds a maximum of 20 passengers. It costs you \$100 per flight from St. Thomas to St. Croix for gas and wages plus an additional \$6 per passenger for the extra gas required by the extra weight. The charge per passenger is \$30 each if 10 people charter your plane (10 is the minimum number you will fly), and this charge is reduced by \$1 per passenger for each passenger over 10 who goes (that is, if 11 go they each pay \$29, if 12 go they each pay \$28, etc.). What number of passengers on a flight will maximize your profits?
16. In the planning of a coffee shop, we estimate that if there is seating for between 40 and 80 people, the daily profit will be \$50 per seat. However, if the seating capacity is more than 80 places, the daily profit per seat will be decreased by \$1 for each additional seat over 80. What should the seating capacity be in order to maximize the coffee shop's total profit?
17. In the planning of a taco restaurant, we estimate that if there is seating for between 10 and 40 people, the daily profit will be \$10 per seat. However, if the seating capacity is more than 40 places, the daily profit per seat will be decreased by \$0.20 per seat. What should the seating capacity be in order to maximize the taco restaurant's total profit?
18. The total cost in dollars for Alicia to make q oven mitts is given by $C(q) = 64 + 1.5q + .01q^2$.
- (a) What is the fixed cost?
- (b) Find a function that gives the marginal cost.
- (c) Find a function that gives the average cost.
- (d) Find the quantity that minimizes the average cost.
- (e) Confirm that the average cost and marginal cost are equal at your answer to part (d).
19. Shaki makes and sells backpack danglies. The total cost in dollars for Shaki to make q danglies is given by $C(q) = 75 + 2q + .015q^2$. Find the quantity that minimizes Shaki's average cost for making danglies.